

Find Differences




Watch Carefully & Find out the all the living and non living things start with **B** letter

$4 \times 5 = 24$
 $5 \times 6 = 35$
 $6 \times 7 = 48$
 $7 \times 8 = 63$
 $8 \times 9 = ??$

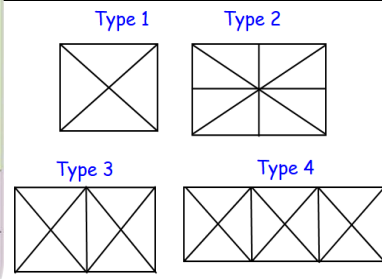
Find out the Similarities..




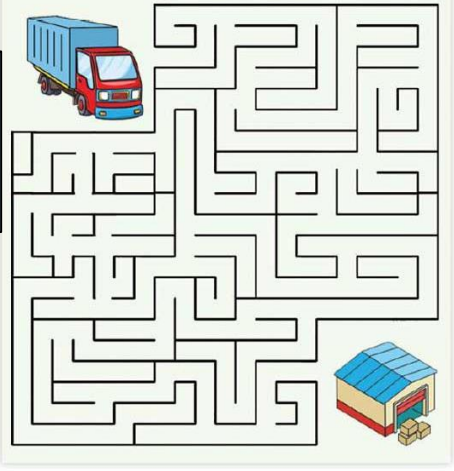
Find out the mistakes in this picture



Count Me :Number of Triangles.....?



Find out the Route....



Find out which will be the next

